

Q3

— (A) —

Given:

Three Partners share the profit in  
the ratio = 5:7:8

They invested for 14, 8, 7 months respectively

Ratio of their investment

Solution:

$$I_1 : I_2 : I_3 = ?$$

$$14I_1 : 8I_2 : 7I_3 \rightarrow \text{multiplying by} \\ \text{number of months}$$

$$\frac{14I_1}{8I_2} = \frac{8I_2}{7I_3} \rightarrow \textcircled{i}$$

$$\frac{14I_1}{8I_2} = \frac{14I_1}{7I_3} \Rightarrow 8I_2 = 7I_3 \\ \Rightarrow \frac{I_2}{I_3} = \frac{7}{8} \rightarrow \textcircled{ii}$$

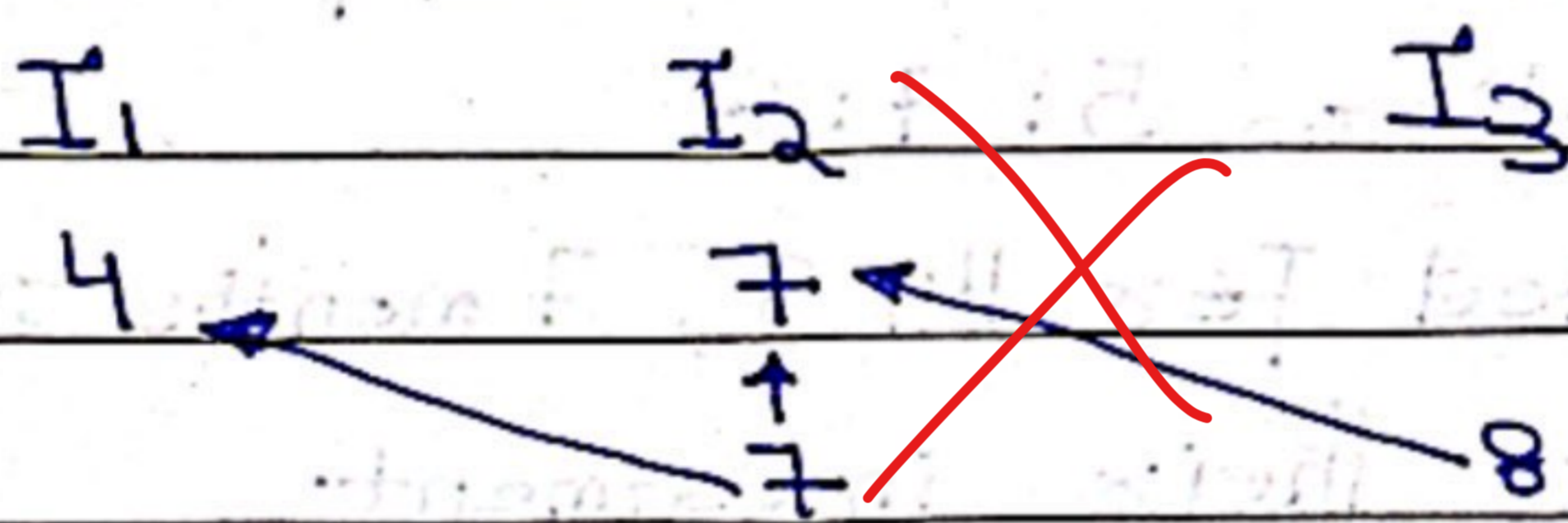
$$\frac{14I_1}{7I_3} = \frac{8I_2}{7I_3}$$

$$\frac{I_1}{I_2} = \frac{8}{14} = \frac{I_1}{I_2} = \frac{4}{7} \rightarrow \textcircled{iii}$$

Using (ii) and (iii)  
and finding continued ratio

~~$$\frac{I_1}{I_3} = \frac{I_1}{8}$$~~

~~$$\frac{I_1}{I_2} = \frac{4}{7}$$~~



~~$$28 : 49 : 56$$~~

~~$$I_1 : I_2 : I_3 = 28 : 49 : 56$$~~
~~$$= 4 : 7 : 8$$~~

~~Ratio of investment = 4:7:8~~

DATE: \_\_\_/\_\_\_/\_\_\_

-(B)-

## Solution

Avg of three consecutive odd numbers is 91

Let the number be  $x$

$$\frac{(x) + (x+2) + (x+4)}{3} = 91$$

$$\frac{3x+6}{3} = 91$$

$$\cancel{3}(x+2) = 91$$

$$x = 91 - 2 = 89$$

$$x+2 = 91$$

$$x+4 = 93$$

The numbers are 89, 91, 93

DATE: \_\_\_ / \_\_\_ / \_\_\_

(C)

**Solution :-**

Given: 40% of number a number =

$\frac{2}{3}$  of another number  
then ratio of 1<sup>st</sup> and 2<sup>nd</sup> number

Let  $x =$  1<sup>st</sup> number

$y =$  2<sup>nd</sup> number

$$40\% \times x = \frac{2}{3} y$$

$$\frac{4}{10} x = \frac{2}{3} y$$

$$x = \frac{2 \times 10 y}{4 \times 3}$$

$$\frac{x}{y} = \frac{20}{12}$$

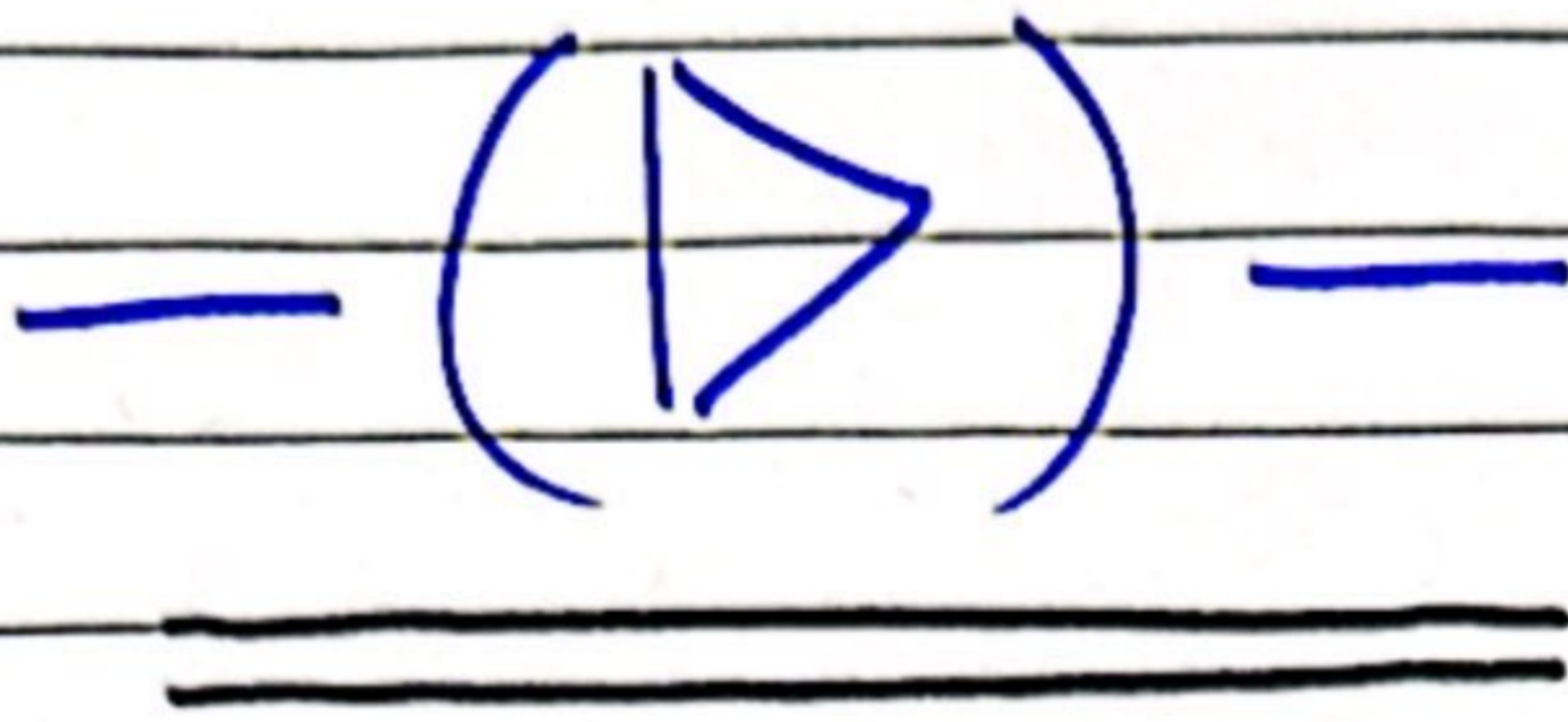
$$\frac{x}{y} = \frac{5}{3}$$

$$x:y = 5:3$$

First number: Second number =

5 : 3

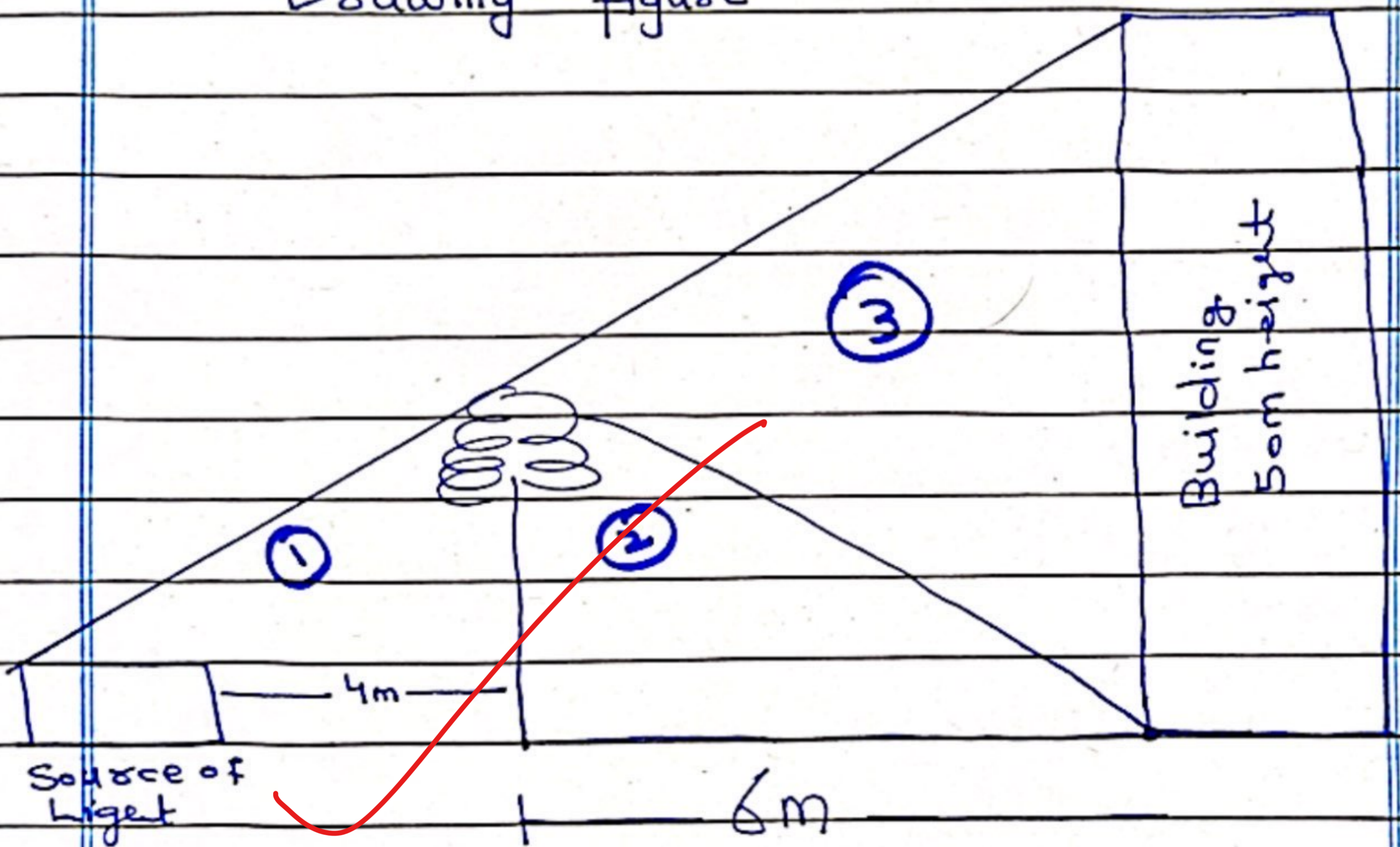
5



Solution:

Given

Drawing Figure



⇒ Using similar triangle theorem: using triangle ① and ③

$$\frac{\text{height of tree}}{\text{distance b/w tree and light}} = \frac{\text{height of building}}{\text{distance b/w building and light source}}$$

$$\frac{\text{height of tree}}{4\text{m}} = \frac{50\text{m}}{6+4}$$

$$= \frac{2}{4} \times \frac{50}{1} = \frac{10}{2} = 5$$

height of tree = 20m

~~Q 2~~

(A)

Solution =

Given data:

Mixture = 60 litres (2:1) = milk: water

Reversing the ratio (1:2) = milk: water

how much water required.

$$\text{At } 2:1 \text{ ratio} \Rightarrow \text{milk} = \frac{2}{3} \times 60 = 40 \text{ litres}$$

$$\Rightarrow \text{water} = 60 - 40 = 20 \text{ litres}$$

$$\text{milk : water} = 40 : 20$$

Multiplying water  $\times 4$

$$\text{milk : water} = 40 : 80$$

$$\text{milk : water} = 1 : 2$$

$$80 - 20 \text{ litres water} = 60 \text{ litres}$$

60 litre water should  
be added

(B)

Solution:

Given data:

$$10 \text{ years ago (Age of Father)} = \text{Son age}$$

$$\text{Ten years after (Age of Father)} = 2 \times \text{Son age}$$

$$F_{\text{age}} - 10 = \text{Son age} \rightarrow \textcircled{1}$$

$$F_{\text{age}} + 10 = 2 \times \text{Son age} \rightarrow \textcircled{2}$$

Subtracting  $\textcircled{2}$  from  $\textcircled{1}$

~~$$F_{\text{age}} - 10 = \text{Son age}$$~~

~~$$+ F_{\text{age}} + 10 = 2 \times \text{Son age}$$~~

~~$$-20 = - \text{Son age}$$~~

~~$$\text{Son age} = 20 \text{y} \rightarrow \textcircled{3}$$~~

Putting in  $\textcircled{1}$

$$F_{\text{age}} = 10 + \text{Son age}$$

$$F_{\text{age}} = 10 + 20 = 30 \text{y}$$

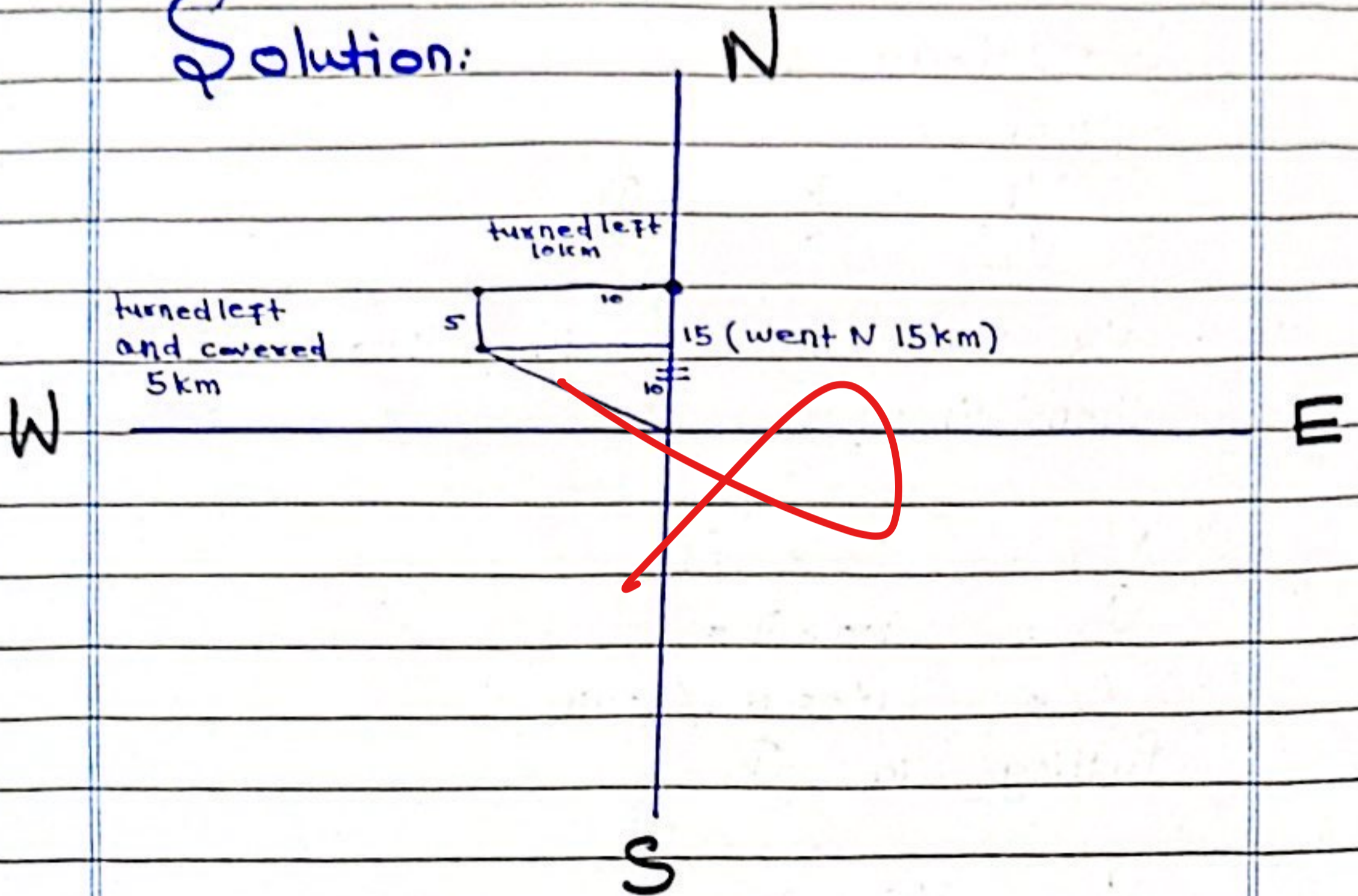
$$\frac{F_{\text{age}}}{\text{Son age}} = \frac{30 \text{y}}{20 \text{y}} = 3:2$$

Ratio of their ages = 3:2

DATE: \_\_\_/\_\_\_/\_\_\_

(c)

Solution:




~~I) He is in north-west direction from home~~

~~(iii)  $15 + 10 + 5 = 30$  km (total distance covered)~~

(ii) distance from home:

Using Pythagoras Theorem




$$x^2 = 10^2 + 10^2$$

$$= \sqrt{200} = 14.2 \text{ km away from home}$$



DATE: \_\_\_ / \_\_\_ / \_\_\_



**Solution=**

Given:

$$\frac{V_1}{V_2} = \frac{7}{8} \rightarrow \textcircled{1}$$

~~$V_2$  runs 400 km in 4 hours~~

~~then  $V_1 = ?$~~

~~$$V_2 = S_2 \times T_2$$~~

~~$$V_2 = 400 \times 4 =$$~~

~~$$V_2 = 1600 \text{ km/hour}$$~~

~~Putting in  $\textcircled{1}$~~

~~$$V_1 = V_2 \times \frac{7}{8}$$~~

~~$$V_1 = 1600 \times \frac{7}{8}$$~~

~~$$= \frac{2}{16} \times 100 \times 7$$~~

$V_1 = 1400 \text{ km/h}$